

# Lesson 1.1: Decimals and Percents


## Targets

1. I can convert decimals to percentages.
2. I can convert percentages to decimals.

## What is a Percent


Shade 20% of the square below:

Try this on your own first, then watch the video



Video:

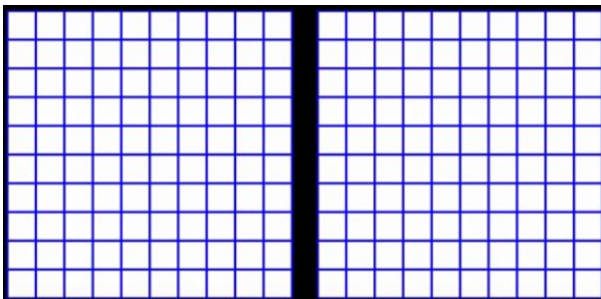
Watch the video and copy your notes here:



## What is a Percent over 100

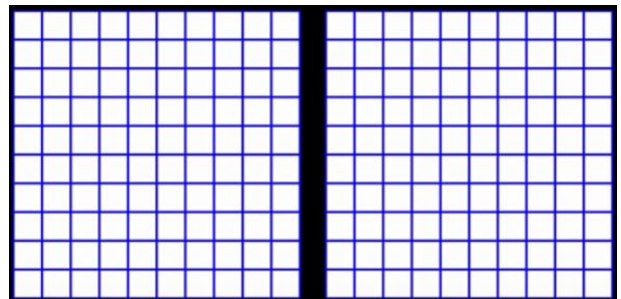
Your attempt:

Show 109% by shading.



Video Notes:

Show 109% by shading.



## Your own definition

Write a definition for "Percent" in your own words:

## Converting Decimals to Percents

Your attempt:  
Convert 0.601 to a Percent

Video Notes:  
Convert 0.601 to a Percent

### Activity 1

Complete Activity 1 on Khan: Converting Decimals to Percents

## Converting Percents to Decimals

Your attempt:  
Convert 59.2% to a Decimal

Video Notes:  
Convert 59.2% to a Decimal

### Activity 2

Complete Activity 2 on Khan: Converting Percents to Decimals

### Exit Ticket

Activity 1: Converting Decimals to Percents Complete: \_\_\_\_\_

Activity 2: Converting Percents to Decimals Complete: \_\_\_\_\_

Notes are Complete: \_\_\_\_\_